

Environmental Studies - 0

1. My family

B. Match the following : (AD)

1. C 2. D 3. A 4. B 5. E

C. Rearrange the jumbled alphabets to find your relatives : (AD)

1. sister 2. father 3. grand father 4. brother

2. My Body

B. Match the following : (AD)

1. C 2. A 3. D 4. B

C. Fill in the following boxes : (AD)

1. 2 2. 2 3. 2

D. Rearrange the jumbled alphabets : (AD)

1. fingers 2. neck 3. nose 4. toe 5. kneel

3. Our Sense Organs

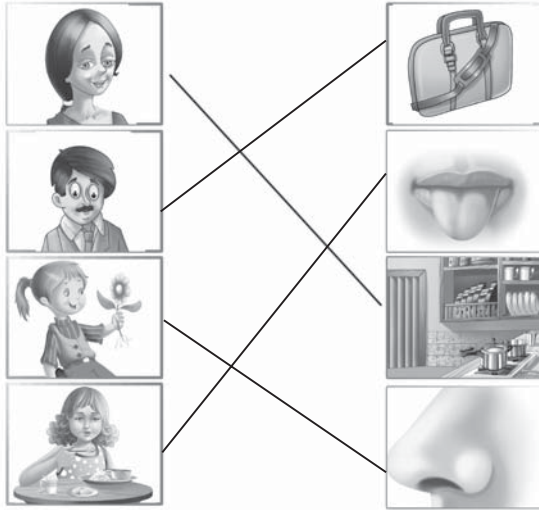
B. Fill in the blanks : (AD)

1. Skin 2. Ear 3 Eyes

C. Match the following : (AD)

1. D 2. A 3. E 4. B 5. C

D. Match the following : (TB)



E. Student Activity : (TB)

4. Hygiene

B. Fill in the blanks :

1. Clean 2. Teeth 3. Dirty

C. Match the following.

1. C 2. A 3. B 4. E 5. D

5. Some Things Injurious to Health

B. Arrange the jumbled alphabets that to injurious to health :

1. Alcohol 2. Tobacco 3. Cigarette 4. Narcotics

C. Fill in the blanks :

1. Gutkha 2. Tobacco 3. Cigarette

D. Match the following :

1. C 2. A 3. E 4. B 5. D

6. Different Types of Houses

B. Fill in the blanks :

1. Bricks, Cement 2. Deserts 3. Roots

C. Match the following :

1. E 2. D 3. B 4. A 5. C

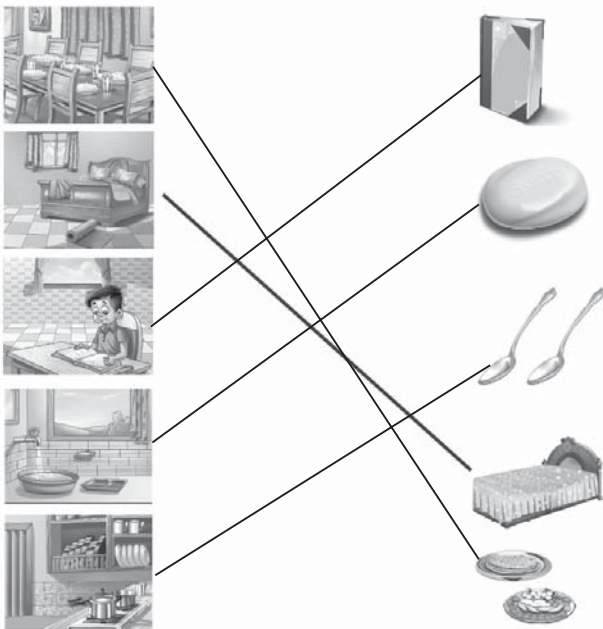
7. My House

B. Fill in the blanks : (TB)

1. Flower vase 2. Sofa set 3. Air Condition 4. Tails
5. Window 6. Curtain 7. Telephone 8. Teapoy
9. Bulb etc.

8. In the House

B. Match the following. Draw lines to the match picture. One is done for you : (TB)



9. Who Build our Buildings

B. Fill in the blanks : (AD)

1. Labourer 2. Mason 3. Painter 4. Plumber 5. Carpenter

C. Identify the following pictures : (AD)

1. Carpenter 2. Painter 3. Mason

D. Match the following : (AD)

1. E 2. A 3. D 4. B 5. C

10. Kith and Kin

B. Fill in the blanks : (AD)

1. Aunt 2. Cousin 3. Nice 4. Uncle 5. Nephew

C. Match the following : (AD)

1. D 2. A 3. E 4. C 5. B

D. Student activity.

11. My School

B. Fill in the blanks : (AD)

1. School 2. Principal 3. Library 4. Computer

C. Match the following : (AD)

1. E 2. A 3. D 4. B 5. C

12. Our Play Ground

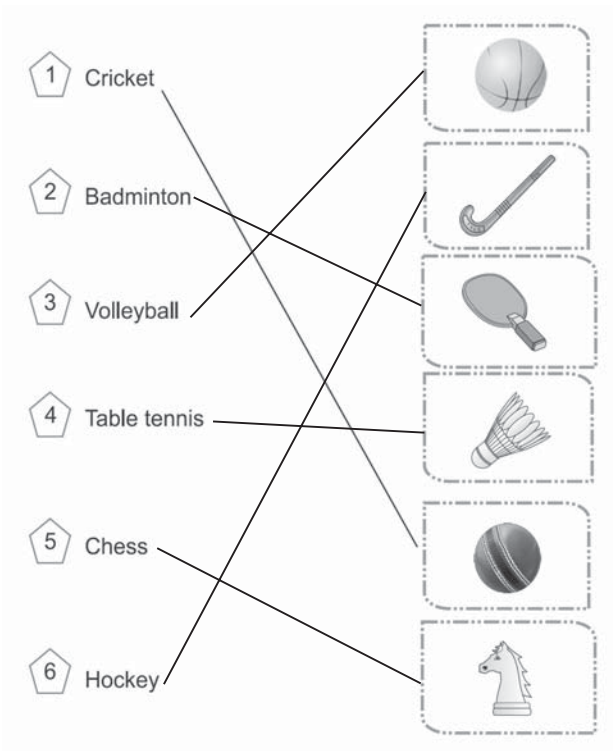
B. Fill in the blanks : (AD)

1. Cricket 2. Hockey 3. Kabadi 4. Valley ball 5. Foot ball

C. Match the following : (AD)

1. D 2. A 3. E 4. B 5. C

D. Match the following. Draw lines to match the picture. One is done for you. (TB)



13. My Neighbourhood






B. Complete the names. (AD)

1. Hospital 2. Bank 3. Police 4. Garden 5. Jewellery

C. Rearrange the alphabets to a meaningful word : (AD)

1. station 2. hospital 3. bank 4. garden 5. shop

D. Match the following. Draw lines to match the picture. One is done for you. (AD)






| | |
|--|---|
| <p>1 Super market</p> <p>2 Textile shop</p> <p>3 Cinema hall</p> <p>4 Sweet shop</p> <p>5 Police Station</p> |      |
|--|---|

14. People Who Help Us

B. Complete the names : (AD)

1. Postman 2. milkman 3. Cobbler 4. Doctor 5. Tailor

C. Match the following. Draw lines to match the picture. One is done for you. (AD)

| | | |
|--|---|--|
| <p>1 Carpenter</p> <p>2 Teacher</p> <p>3 Washerman</p> <p>4 Potter</p> <p>5 Watchman</p> | <p>a.</p> <p>b.</p> <p>c.</p> <p>d.</p> <p>e.</p> |      |
|--|---|--|

D. Fill in the blank square : (TB)

1. Bank 2. Cobbler 3. Police 4. Hospital
5. Cinema 6. Saras 7. Potter 8. Post office

15. Festivals : National and Religion

B. Complete the names : (AD)

1. Gandhi Jayanthi 2. Gurupurab 3. Eid
4. Holi 5. Diwali

C. Match the following. Draw lines to match the picture. One is done for you. (AD)

1 Independence Day

2 Gandhi Jayanti

3 Republic Day

4 Eid

5 Dussehra

The images on the right are: 1. The Taj Mahal in Agra, India. 2. A traditional Indian temple with a gopuram. 3. A parade float decorated with flowers and people, typical of Republic Day. 4. A mosque with a large dome and minarets. 5. A festival float decorated with flowers and people, typical of Dussehra.

16. Places of Worship









B. Complete the names : (AD)

1. Temple 2. Gurupurab 3. Church 4. Mosque

C. Rearrange the alphabets to a meaningful word : (AD)

1. temple 2. buddha 3. church
 4. jain 5. mosque

D. Match the following. Draw lines to match the picture. One is done for you. (TB)

| | | | |
|----|---|----|---|
| 1. |  Lord Krishna | A. |  Christian Church |
| 2. |  Jesus Christ | B. |  Temple |
| 3. |  Gurunank | C. |  Mosque |
| 4. |  Moon-star | D. |  Golden Temple |

17. Food for Health

B. Fill in the blanks : (AD)

1. Fruits 2. One 3. Water

C. Identify the following fruits and write their names :

1. Grapes 2. Orange 3. Banana 4. Apple

D. Match the following : (AD)

| | | | | |
|----|--------------|---|----|-----------------|
| 1. | Fruits | <div style="border: 1px solid black; padding: 5px; width: fit-content; margin: 0 auto;">Breakfast food</div> <div style="border: 1px solid black; padding: 5px; width: fit-content; margin: 0 auto;">Lunch & Dinner</div> | A) | Parota |
| 2. | Pakoda | | B) | Puri & Curry |
| 3. | Rice | | C) | Idly and Sambar |
| 4. | Roti and Dal | | D) | Dosa & Idly |

22. Animals and Birds

B. Fill in the following boxes : (AD)

1. Parrot 2. Rabbit 3. Peacock 4. Penguin 5. Donkey

C. Match the following : (AD)

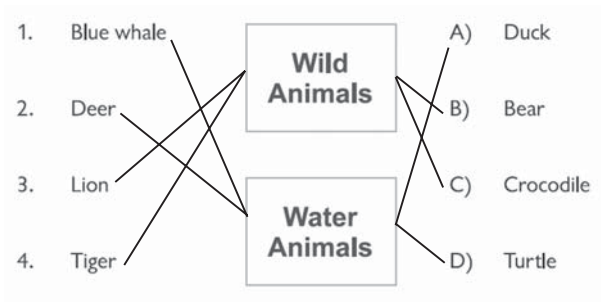
1. D 2. E 3. A 4. B 5. C

23. Wild Animals

B. Arrange the jumbled alphabets that to injurious to health : (AD)

1. Elephant 2. Giraffe 3. Dolphin 4. Frog 5. Turtel

C. Match the following : (AD)



24. Where do they Live ?

B. Match the following with related fruits : (AD)

1. D 2. A 3. B 4. E 5. C

25. Sounds of Animals

B. Match the following with related animals : (AD)

1. C 2. A 3. B 4. E 5. D

26. Young ones

B. Match the following with their young ones : (AD)

1. C 2. A 3. B 4. E 5. D

C. Fill in the blank square : (TB)

1. Lamb 2. Chicken 3. Puppy 4. Foul 5. Calf

6. Kitten 7. Duck 8. Frog 9. Dolphin 10. Eagle

D. Identify the following pictures and write their names : (AD)

1. Lamb 2. Puppy 3. Foal

27. Insects

B. Fill in the following boxes : (AD)

1. Cockroach 2. Bee 3. Wasp 4. Mosquito 5. Spider

C. Match the following with related insects : (AD)

1. E 2. A 3. B 4. C 5. D

28. Clothes for Protection and Dignity

B. Match the following with related clothes: (AD)

1. T.Shirt A)
2. Cotton Clothes B)
3. Thick woolen Clothes C)
4. Rain Coat D)



29. Means of Communication

B. Identify the following pictures and write their names :

1. postcard
2. Mouse
3. Cellphone
4. Fax Machine
5. Monitor (Computer)

30. Seasons

B. Fill in the following boxes :

1. Springs
2. Winter
3. Summer
4. Autumn

31. Enviromental Pollution

B. Match the following with related pollutions :

1. C
2. A
3. B

32. Rules of the Road

B. Fill in the following boxes :

1. Stop
2. go

C. Student Activity

33. Means of Transport

B. Fill in the following boxes :

1. Scooter
2. Train
3. Tonga
4. Aeroplane
5. Tractor

C. Match the following :

- | | | | | |
|---------------|---|-----------------|---|------------|
| 1. Scooter | → | Land Transport | ← | A) Bicycle |
| 2. Helicopter | → | Air Transport | ↗ | B) Xebec |
| 3. Ship | → | Water Transport | ↘ | C) Rocket |

Environmental Studies - I

1. Myself

A. Tell us about yourself. (TB)

Student Activity

B. Student Activity (paste pictures) (TB)

C. Draw Pictures of your favourite things here : (TB)

Student Activity

2. My Body

B. Multiple Choice Questions : (TB)

1. b 2. b 3. c

C. Write how many of each of these parts do you have : (TB)

1. Two 2. Two 3. One 4. Ten 5. One
6. Two 7. Two 8. Two 9. Ten

D. Name our body parts used in the following actions : (TB)

1. Hands and Legs, Eyes 2. Hands, Eyes

E. Paste your Photographs here and label the parts of our body: (TB)

Student Activity

F. Find out which part of the face is missing in each of these pictures:(TB)

1. Eyes 2. Nose 3. Ears 4. Mouth

G. Label the parts of this face : (TB)

1. Hair 2. Eyebrow 3. Ear 4. Chin 5. Cheek
6. Mouth 7. Nose 8. Eyelashes 9. Eye 10. Forehead

3. Our Sense Organs

B. Fill in the blanks with suitable words : (AD)

1. Five 2. Tongue 3. Skin 4. Nose

C. Multiple choice Questions : (TB)

1. a 2. b

D. Complete the crossword of these organs : (TB)

1. Ears 2. Skin 3. Tongue
4. Eyes 5. Nose

E. Look at the pictures below and write which sense organs is used :(TB)

1. Eyes 2. Eyes 3. Skin 4. Nose
5. Tongue

F. Match the followings : (TB)

1. E 2. A 3. D 4. B 5. C

4. My Family

B. Paste your family Photographs here : (TB)

Student Activity

C. Circle red what your mother does and circle blue what your father does, circle in green what both of them do: (TB)

Student Activity

D. Write the Names of your _____ : (TB)

Student Activity

E. Multiple choice Questions : (TB)

1. a 2. c

F. Write down the names or stick pictures of your family members in the circle of the family there : (TB)

Student Activity

E. Find out the words related to these lines in this crossword : (TB)

1. Walls 2. Window 3. Floor 4. Ceiling

F. Where will you find these things in the House ? Name the Rooms : (TB)

1. Bed room 2. Study room (or) Reading room 3. Bath room
4. Rest room 5. Dining room 6. Kitchen room

G. Can you findout the names of these houses : (AD)

1. Hut 2. Tent 3. Apartment

8. Keeping Clean and Health

B. Multiple choice questions : (TB)

1. b 2. a 3. c

C. Mark (✓) or (✕) against the following sentence : (TB)

1. ✕ 2. ✓ 3. ✕ 4. ✕ 5. ✕

D. Match the following : (TB)

1. Brushing 2. Trimming Nail
3. Washing Hair 4. Washing Hands

E. From all the habbits you have learnt, write down what you do every-day

what you do once a week : (TB)

Things you do everyday

Things you do once a week

F. Tell about yourself, when you do the following things : (TB)

Student Activity :

9. Safety Rules

B. Multiple choice questions : (TB)

1. c 2. c 3. a 4. a 5. c

C. Pick tick (✓) or cross (✗) alongs the picture : (TB)

1. ✗ 2. ✓ 3. ✗

D. Colour the practice light : (TB)

Student Activity

E. Write ' Yes' or 'No' : (AD)

1. No 2. Yes 3. Yes 4. No 5. Yes

10. Neighbours and neighbouring

B. Multiple choice questions : (TB)

1. b 2. a 3. b 4. b

C. Match the following : (TB)

1. c 2. e 3. a 4. d 5. b

D. Fill in the blanks : (TB)

Student Activity

E. Colour the picture of this school : (TB)

Student Activity

F. Write the names of places where you would find these things: (TB)

1. School 2. Post office 3. Hospital
4. Bank 5. Market 6. Police station

G. Mark (✓) or (✗) against the following sentences: (TB)

1. ✗ 2. ✓ 3. ✗ 4. ✓ 5. ✗

11. People at work

B. Multiple choice questions :

1. c 2. b 3. a

C. Match the people with the places where they work :

1. c 2. a 3. d 4. b

D. Draw the tools used by these people : (TB)

Student Activity

E. Mark (✓) or (×) against the following sentences : (AD)

1. ✓ 2. × 3. × 4. ✓ 5. ✓

12. Festivals We Celebrate

B. Multiple choice Questions : (TB)

1. b 2. a

C. Fill in the blanks : (TB)

1. Lakshmi 2. Mosque
3. Gurudwaras 4. Tree

D. Name the Festivals : (TB)

1. Eid 2. Christmas
3. Republic Day 4. Gandhi Jayanthi

E. Colour these Monkeys of Mahatma Gandhi and discuss in the class what they represent : (TB)

Student Activity

F. Match the following : (AD)

1. c 2. a 3. e 4. b 5. d

13. How We Travel

B. Multiple choice Questions : (TB)

1. c 2. a 3. c 4. a

C. Fill in the blanks : (TB)

1. Bus, Car 2. Boat, Ship
3. Aeroplane, Helicopter 4. Camel, Elephant

D. Match the following : (TB)

1. b 2. c 3. a

G. Rearrange the letter correctly to get the Names of the part of the plant. (AD)

1. Bud 2. Flower 3. Stem 4. Root
5. Leaf 6. Branch 7. Fruit

H. Match the following : (AD)

1. D 2. E 3. A 4. B 5. C

15. The Animal World

B. Multiple choice questions : (TB)

1. a 2. c 3. b

C. Give two examples of each of the following : (AD)

1. Sparrow, Pigeon 2. Cockroach, Housefly
3. Cat, Dog. 4. Bluewhale , Elephant

D. Write 'Yes' or 'No' : (TB)

1. No 2. Yes 3. No

E. Rearrange the letters to name these animals correctly : (TB)

1. Rabbit 2. Sparrow 3. Cockroach
4. Cat 5. Elephant 6. Sheep

F. Lable the body parts of this bird : (TB)



1. beak 2. clawn 3. tail
4. feather 5. eye

G. Match the following : (AD)

1. D 2. E 3. A 4. B 5. C

16. Food and Homes of Animals

B. Multiple choice questions : (TB)

1. a 2. b 3. c 4. c 5. a 6. c

C. Take these animals to their respective homes : (TB)

1. d 2. c 3. c 4. a 5. f 6. b

D. Write 'Yes' or 'No' : (TB)

1. No 2. No 3. Yes 4. No 5. No

E. Fill in the blanks : (AD)

1. kennel 2. pen 3. water
4. nest 5. hive

17. The Sky

B. Multiple choice questions : (TB)

1. c 2. a 3. b

C. Draw in the dots and colour these pictures : (TB)

Student Activity

18. Our Earth

B. Multiple choice questions : (TB)

1. b 2. b

C. Fill in the blanks : (TB)

1. blue 2. earth 3. plateau 4. river

D. Identify the following pictures and write their names : (AD)

1. mountain 2. valley 3. plateau 4. forest 5. desert

E. Match the following : (AD)

1. d 2. c 3. a 4. b 5. c

Environmental Studies - 2

1. Myself

- B. Student Activity (TB)
- C. Student Activity (TB)
- D. Student Activity (TB)

2. My Body

- B. Fill in the blanks : (AD)
1. 2 2. 72 3. Skin 4. Breath 5. Ears
- C. Tick the correct option : (TB)
1. c 2. c 3. c 4. b
- D. Match the following : (AD)
1. D 2. A 3. E 4. B 5. C
- E. Name the organs : (TB)
1. Brain 2. Heart 3. Stomach
- F. Write 'T' for True and 'F' for False Sentences : (TB)
1. X 2. ✓ 3. X 4. ✓ 5. ✓

3. Growing up

- B. Tick (✓) the correct option : (TB)
1. All 2. babies 3. weak 4. grey
- C. Fill in the blanks : (TB)
1. Men 2. Women 3. Adults 4. Babies

D. Match the following : (AD)

1. E 2.A 3. B 4 . C 5. B

E. Paste the pictures to show the order of growth :

Student Activity

4. My Family

B. Fill in the blanks : (AD)

1. family 2. money 3. nuclear 4. uncle 5. aunt

C. Tick (✓) the correct option : (TB)

1. b 2. b 3. b

D. Write 'yes' or 'no' : (TB)

1. Yes 2. Yes 3. Yes

E. Match the following :

1. C 2. D 3. E 4. A 5. B

F. Write a sentence of about each of them : (TB)

Student Activity

G. Find out the words in the word search : (TB)

Student Activity

5. Food We Eat

B. Fill in the blanks : (TB)

1. plants, animals 2. fruits, vegetables
3. cooking 4. digest 5. waste

C. Write 'Yes' or 'No' : (TB)

1. No 2. No 3. No 4. Yes

D. Tick (✓) reorrect option : (TB)

1. a 2. b 3. a

E. Paste the picture of three food items in each box below : (TB)

Student Activity

F. Write your own poem "Food we Eat" here : (TB)

Student Activity

6. Clothes We Wear

B. Tick (✓) the correct option : (TB)

1. c 2. a 3. b 4. c

C. Match the following : (TB)

1. c 2. a 3. d 4. b

1. Yes 2. No 3. No 4. Yes 5. YesD.

We wear different dresses at different times. Look at the clothes at these children and the name the place they are going to : (TB)

1. Wedding 2. Swimming
3. Fancy dress competition 4. School

E. Write 'Yes' or 'No' : (AD)

F. Fill in the Boxes in the following : (AD)

1. Sheep → → → woolen cloth
2. Silk worm → → cloth.

7. Our Houses

B. Fill in the blanks : (TB)

1. House 2. Safe, comfortable 3. Flat 4. House boat

C. Tick (✓) the correct option : (TB)

1. a 2. b 3. a 4. a

D. Name the following people : (TB)

1. Electrician 2. Computer 3. Mason

E. Match the following : (TB)

1. b 2. a

F. Fill in the following table : (AD)

1. Draws plan 2. Fixes the pipes
3. Paint the houses 4. Makes furnitures

G. Colour this house beautifully : (TB)

Student Activity

8. Healthy Habits

B. Tick (✓) the correct option : (TB)

1. active 2. balanced diet 3. 8 hours

C. Write 'Yes' or 'No' : (AD)

1. Yes 2. No 3. No 4. Yes

D. Fill in the blanks : (AD)

1. Wealth 2. Mind 3. Posture

9. Safety Habits

B. Tick (✓) the correct option : (TB)

1. a 2. b 3. a 4. b 5. c

C. What is wrong in these pictures : (TB)

1. Don't run on road.
2. Don't play with knives and scissors.
3. Don't take any part of our body out of the window.
4. Never touch electric wires with wet hands.
5. Don't leaves your toys and other things on the floor.
6. Don't talk to the driver.

D. Find out these symbols meaning : (TB)

1. Railway gate 2. School zone 3. Dead end
4. Prohibited area 5. Speed brakers

E. Write 'Yes' or 'No' : (AD)

1. No 2. No 3. Yes

10. Neighbourhood

B. Fill in the blanks : (AD)

1. Hospital 2. Police 3. Postman 4. Fireman

C. Tick (✓) the correct option : (TB)

1. c 2. b 3. b 4. b

D. Name these places : (TB)

1. Bank 2. Hospital 3. Post office
4. Police station 5. Fire station 6. Green grocery shop

- E. Here** -----

----- **Worship places ? (TB)**

Student Activity

11. Occupations

- B. Tick (✓) the correct option : (TB)**
1. a 2. c
- C. Can you rearrange the letters to name these people : (TB)**
1. Florist 2. Principal 3. Pilot 4. Watchman
- D. Discuss who do they need to help them : (AD)**
1. Carpenter 2. Plumber 3. Doctor
- E. Write 'Yes' or 'No' : (AD)**
1. Yes 2. No 3. Yes 4. No
- F. Match the following : (TB)**
1. E 2. A 3. B 4. C 5. D

12. Festivals

- B. Fill in the blank with suitable words : (AD)**
1. Crackers 2. Holi 3. days
4. Kerala 5. Langer
- C. Tick (✓) the correct option : (TB)**
1. a 2. c 3. c
- D. Write 'Yes' or 'No' : (AD)**
1. Yes 2. Yes 3. No 4. No 5. Yes
- E. Match the following : (AD)**
1. E 2. A 3. B 4. C 5. D
- F. Find out the names of these Festivals and write 2-3 lines above each : (TB)**
Student Activity

13. Types of Transport

B. Fill in the blanks with suitable words : (AD)

1. Three 2. Camels 3. Forsts 4. Ponnies and mules

C. Tick (✓) the correct option : (TB)

1. c 2. a 3. c

D. Circle the odd one : (TB)

1. boat 2. ship 3. aeroplane

E. Name these means of transport : (TB)

1. Car 2. Scooter 3. Cycle 4. Tonga

F. Write the name of correct means of transport which you will use for the following : (TB)

1. Car (Land transport) 2. Lorry (Land transport)
3. Train (Land transport) 4. Boat (water transport)

14. Means of communication

B. Tick (✓) recorrect option : (TB)

1. a 2. b 3. a 4. b

C. Name the means of communication : (TB)

1. Telephone 2. Cellphone 3. Computer

D. Fill in the blanks : (TB)

1. Communication 2. Radio 3. Public phone 4. Television

E. Write your address on this post card : (TB)

Student Activity

F. Colour this post box : (TB)

Student Activity

G. Match the following : (TB)

1. E 2. A 3. D 4. B 5. C

15. Time and Directions

B. Tick (✓) the correct option : (TB)

1. a 2. c 3. c 4. b 5. c

C. Complete the following words given : (TB)

1. 60 minutes 2. 7 days 3. south

D. Look at the pictures, recognise the part of the day and write their names in the space provided : (TB)

1. Morning 2. Noon 3. Evening 4. Night

E. Mark the four major directions : (TB)

1. Top - East 2. Bottom - West
3. Left - North 4. Right - South

F. Match the following : (AD)

1. E 2. A 3. E 4. B 5. D

16. Plants Around Us

B. Tick (✓) the correct option : (TB)

1. b 2. b 3. b

C. Fill in the blanks : (TB)

1. Tress 2. shrubs 3. watermelon, pumpkin 4. useful 5. care

D. Find the names of 2 examples for each : (AD)

1. mint, tulasi 2. cotton, rose 3. mango, gulmohar
4. pea plant, grape vine 5. watermelon, pumpkin

E. Find out the parts from the following plant : (TB)

1. stem 2. bud 3. flower 4. leaf 5. branch 6. fruit

F. Fill in the blanks : (AD)

1. leaf 2. root 3. stem 4. flower 5. fruit 6. branch 7. bud

G. Match the following : (AD)

1. C 2. A 3. B 4. E 5. D

17. Animals around us

B. Fill in the banks : (AD)

1. honey bee 2. sheep 3. silk worm 4. hen 5. calf

C. Tick (✓) the correct option : (TB)

1. c 2. a 3. b

D. Name the young ones : (TB)

1. kid 2. pup 3. calf

E. Match the following : (AD)

1. D 2. F 3. A 4. H 5. B 6. I 7. C 8. E 9. G

F. Fill the following table : (AD)

1. nest 2. burrow 3. web 4. on trees 5. stable
6. shed 7. kennel 8. coop 9. sty

18. Weather and Seasons

B. Fill in the blanks : (AD)

1. February to March 2. five 3. Woolen
4. Umbrella, rain coat 5. September, October

C. Name the weather condition : (TB)

1. A cool day 2. A rain day 3. A hot day 4. winter day

D. Write Yes or No : (TB)

1. Yes 2. No 3. Yes 4. Yes 5. Yes

E. Match the following : (AD)

1. C 2. D 3. A 4. E 5. B

19. Our Earth

B. Tick (✓) the correct option : (TB)

1. blue 2. low 3. desert 4. sea

C. Name these Land and Water forms : (TB)

1. River 2. Hills 3. Ocean 4. Dessert

D. Colour this picture : (TB)

student activity

E. Fill in the blanks with suitable words : (AD)

1. Earth 2. desert
3. Table land 4. 1/3 5. Earth

Environmental Studies - 3

1. In The Family

B. Fill in the blanks with the words given in the box : (TB)

1. family 2. foster 3. grand parents

C. Multiple choice questions : (TB)

1. a 2. a 3. b

D. Tick (✓) the true and cross (x) the false statement : (TB)

1. ✗ 2. ✓ 3. ✗

E. Complete the puzzle using the clues : (TB)

1. Grand Mother 2. Sister 3. Cousin 4. Daughter 5. Brother

F. Make your own family tree in your EVS note book and clearly mark all the generations :

Student Activity :

G. Make a family album. Stick the pictures of each of your family members and write about his /her details on the opposite page:

Student activity

H. Match the following:

1. D 2. A 3. B 4. E 5. C

I. Observe the following hand and how it compare with your family.

1. Thumb → Brother
2. Pink Finger → I
3. Ring finger → Sister
4. Pointer finger → Mother
5. Middle finger → Father

2. Our Senses

B. Fill in the blanks : (TB)

1. sense 2. Braille Script 3. hearing - aid 4. dirty 5. kind, sensitive

C. Multiple choice questions : (TB)

1. a 2. a 3. a

D. Match the columns : (TB)

1. c 2. a 3. d 4. b

E. Look at the picture and write the names of the related sense organs : (TB)

1. ear 2. skin 3. tongue
4. eye 5. nose

F. Put the names of five sense organs in this puzzle in such a way that they form a perfect ladder : (TB)

1. tongue 2. eyes 3. ears
4. skin 5. nose

F. Tick (✓) the True and cross (×) the false statement : (AD)

1. × 2. ✓ 3. × 4. ✓ 5. ×

3. People who help us

B. Fill in the blanks : (TB)

1. work 2. abilities, choices 3. thieves
4. family members 5. child labour

C. Multiple choice questions : (TB)

1. a 2. b 3. a 4. b

D. Tick (✓) the True and cross (×) the false statement : (TB)

1. ✓ 2. × 3. ✓ 4. × 5. ✓

E. Hear are tools used by some people. Look at these and try to name the professionals : (TB)

1. plumber 2. barber 3. tailor
4. electrician 5. doctor 6. potter

F. Match the columns : (AD)

1. c 2. e 3. a 4. b 5. b

G. Identify the following pictures and write their names : (AD)

1. Mother Teresa 2. Medha Patkar 3. Tailor
4. Doctor 5. Sweeper 6. Teacher

E. Use the code A = 1, B = 2, C = 3 and soon the decode this message : (TB)

1. SAVE THE ANIMALS

F. Make picture of animals using different shaped stickers : (TB)

Student Activity.

G. Match the following :

1. D 2. E 3. A 4. B 5. C

H. Fill the following table.

1. Goat 2. Tiger 3. Man 4. Crow

6. Creepy - Crawlies

B. Fill in the blanks with the words given in the box : (TB)

1. spider 2. honey bee 3. bite, sting
4. nectar 5. earth worm

C. Multiple choice questions : (TB)

1. b 2. a 3. b

D. Tick (✓) the True and cross (X) the False statement : (TB)

1. X 2. ✓ 3. X 4. ✓ 5. ✓

E. Name these creepy crawlies : (TB)

1. spider 2. scorpion
3. Earthworm 4. housefly

F. Solve the cross word using given pictures as clues : (AD)

1. grasshopper 2. lady bird 3. housefly
4. spider 5. dragon-fly 6. bugs

G. Write the parts of the following insect : (AD)

1. Antenna 2. Head 3. Thorax
4. Abdomen 5. Wings 6. Legs

H. Match the following : (AD)

1. D 2. A 3. E 4. B 5. C

7. Our Feathered Friends

B. Fill in the blanks box : (TB)

1. light, strong 2. Each
3. patcher 4. true

C. Multiple choice questions : (TB)

1. b 2. b 3. a 4. b

D. Tick (✓) the True and cross (X) the False statement : (TB)

1. ✓ 2. X 3. X 4. ✓

E. Label the picture : (TB)

1. forehead 2. eye 3. throat
4. claw 5. tail 6. wings
7. beak 8. nostril

F. Match the following : (TB)

1. D 2. A 3. B 4. E 5. C

G. By observing the following feathers, write the name of the bird they belong to : (AD)

1. peacock 2. crow 3. duck
4. parrot 5. vulture

H. Observing the difference beaks of the birds and write their names : (AD)

1. parrot 2. duck 3. spoon bill
4. stork 5. crane 6. kite

8. Sources of Food

B. Fill in the blanks : (TB)

1. Balanced diet 2. milk
3. different 4. plants, animals

C. Multiple choice questions : (TB)

1. a 2. a 3. b

D. Tick (✓) the True and cross (X) the False statement : (TB)

1. ✓ 2. ✓ 3. ✓ 4. ✓ 5. ✓

E. Match the following : (TB)

1. E 2. D 3. A 4. B 5. C

F. We eat four meals in a day. Can you name them by unjumbling the letters : (TB)

1. breakfast 2. lunch
3. snacks 4. dinner

G. Decode this message : (TB)

Do not waste food.

H. Fill in the following table : (AD)

1. Eat a lot of sea food like prawns and fish.
2. Eat, Idli, dosa, vada, utappam, rice and sambar.
3. Eat Makki - ki - roti and sar
4. Eat rice with fish curry, sandwich and rasagulla.

I. Give examples of the following different plants that we eaten : (AD)

- | | |
|-------------------|-------------------------|
| 1. Carrot, radish | 2. Sugarcane, potato |
| 3. Wheat, rice | 4. Spinach, mint |
| 5. Apple, mango | 6. Cauliflower, Bracoli |

9. Water

B. Fill in the blanks : (TB)

1. digest 2. rain 3. boiling, filtering

C. Multiple choice questions : (TB)

1. d 2. b 3. d

D. Tick (✓) the True and cross (X) the False statement : (TB)

1. ✓ 2. X 3. ✓ 4. X 5. X

E. Match the following : (TB)

1. C 2. D 3. A 4. B 5. C

F. Find out water hidden in the picture : (TB)

Student Activity

G. The following figures and the sources of water. Write their names : (TB)

1. rain 2. river 3. sea 4. ocean

10. Houses we live In

B. Fill in the blanks : (TB)

1. House 2. kachcha
3. movable 4. Igloos

C. Multiple choice questions : (TB)

1. d 2. b 3. d

D. Tick (✓) the True and cross (X) the False statement : (TB)

1. ✓ 2. X 3. ✓ 4. X

E. Look at these pictures and write the name of the room in which you will keep these things : (TB)

1. bed room 2. common hall
3. bathroom 4. kitchen room

F. Stick pictures of different types of houses in the given space : (TB)

Student Activity

G. Fill the following tables : (AD)

1. temporary house 2. strong house 3. portable house
4. floating house 5. movable house 6. snow house
7. build on poles

11. Time to Move

B. Fill in the blanks : (TB)

1. transportation 2. office workers 3. air

C. Multiple choice questions : (TB)

1. d 2. b 3. c

D. Match the following : (TB)

1. D 2. A 3. B 4. C

E. Write the names of the vechiles : (TB)

1. temporary house 2. strong house 3. portable house
4. floating house 5. movable house 6. snow house
7. build on poles 8. aeroplane 9. ferry
10. ship

F. Tick (✓) the True and cross (✕) the False statement : (AD)

1. ✓ 2. ✓ 3. ✕ 4. ✓ 5. ✕

G. Draw the picture of your favourite vehicle in your note book and colour it : (TB)

Student Activity

H. Colour this slogan : (TB)

Student Activity

12. Means of Communication

B. Fill in the blanks : (TB)

1. communication 2. telegram
3. mass 4. internet

C. Multiple choice questions : (TB)

1. d 2. a

D. Tick (✓) the True and cross (✕) the False statement : (TB)

1. ✕ 2. ✓ 3. ✓

E. Write your address on this post card : (TB)

Student Activity:

F. Identify the following pictures : (AD)

1. T.V.
2. Radio
3. Letter box
4. Inland letter
5. Telgraph
6. Computer

Environmental Studies - 4

1. My Family

B. Fill in the blanks : (TB)

1. loves, cares 2. big, extended 3. small 4. Uncles, Grand parents, Aunts

C. Multiple choice questions : (TB)

1. a 2. d 3. b

D. Tick (✓) the true and cross (x) the false statement : (TB)

1. ✓ 2. ✓ 3. ✗

E. Paste your mother photography as suggested : (TB)

Student activity

F. Colour all the A's, B's, C's and read who yourself : (TB)

Student activity (we set the world FATHER)

G. Fill in the following blanks : (AD)

Student activity

H. Fill the missing letters : (TB)

1. extended family 2. special 3. nuclear 4. generations 5. children

I. Match the following: (TB)

1. E 2. A 3. B 4. C 5. D

2. Our Senses

B. Fill in the blanks with the words given in the box : (TB)

1. sense 2. skin 3. tamed 4. smell

C. Multiple choice questions : (TB)

1. d 2. b 3. a

D. Tick (✓) the true and cross (X) the false statement : (TB)

1. ✓ 2. ✗ 3. ✓ 4. ✗

E. Paste pictures of these things you can identify by only touching : (TB)

Student activity

F. Visit a blind school and take interview of few blind students. Ask them how they are learning to read and write. Ask them about the braille script : (TB)

Student activity

G. These are a number of things that we should not touch. They are dangerous and can harm us. Can you name those things ? (TB)

1. Fire 2. Poison 3. Electricity 4. Chemicals

H. Match the following : (AD)

1. D 2. E 3. A 4. B 5. C

3. People at work

B. Fill in the blanks : (TB)

1. sick 2. potter 3. tailor
4. mechanic 5. food grains 6. clothes

C. Multiple choice questions : (TB)

1. b 2. c 3. a

D. Match the columns : (TB)

1. d 2. a 3. b 4. c

E. Do you know what kind of work these people do : (TB)

1. cuts the hair 2. makes medicines 3. make the shoes

F. Unjumble the name of these people according to the work they do : (TB)

1. watch man 2. gardener 3. green grocer

G. Some jobs are done with the aim of getting satisfaction and happiness, can you name some of them : (TB)

1. singers 2. love 3. affection
4. dance 5. teachings

H. Identify the following pictures and write their names : (AD)

1. Kiranbedi 2. Smt. Prathiba Devi Singh
3. Sunitha Williams 4. Sushmita Sen
5. Sanjeev Kapur 6. joker

I. Tick (✓) the true and cross (X) the false statement : (TB)

1. X 2. ✓ 3. ✓ 4. X

4. Games & Fun

B. Fill in the blanks with the words given in the box :

1. kites 2. relax, play 3. sportsmen's 4. team

C. Multiple choice questions : (TB)

1. a 2. c 3. b

D. Match the columns : (TB)

1. d 2. c 3. a 4. b

E. Recognise the following games : (TB)

Student Activity

F. Write True or False : (TB)

1. True 2. False 3. True

5. The Animal World

B. Fill in the blanks : (TB)

1. social 2. leader 3. rabbit and rats 4. friendly

C. Multiple choice questions : (TB)

1. a 2. b 3. b

D. Match the following : (TB)

1. b 2. c 3. a 4. d

E. Complete the animals puzzle : (TB)

1. Ant 2. Squirrel 3. Lion
4. Snake 5. Tortoise

F. Write the terms are used to describe a group of animals by observing the following pictures : (TB)

1. A troop of monkeys 2. A swam of bees
3. A troop of chimpanges 4. A pack of wolves

G. Tick (✓) the True and cross (X) the False statement : (AD)

1. ✓ 2. X 3. ✓ 4. ✓ 5. X

6. The Plant Kingdom

B. Fill in the blanks : (TB)

1. carrot, radish 2. wheat, onion 3. aerial
4. soil erosion 5. chlorophyll

C. Multiple choice questions : (TB)

1. a 2. c 3. b 4. d

D. Match the following : (TB)

1. d 2. a 3. b 4. c

E. Find out the name of a leaf by writing the names of these plants : (TB)

1. Banyan 2. Gourd 3. Capsicum
4. Lily 5. Rice 6. Carrot 7. Cauliflower

F. Tick (✓) the True and cross (X) the False statement : (AD)

1. ✓ 2. ✓ 3. X 4. X 5. ✓

G. Write the parts of the following plant : (AD)

1. Flower 2. Fruit 3. Branch
4. Leaf 5. Stem 6. Root

H. Find out the names of the following figures : (AD)

1. pumpkin 2. radish 3. banyan
4. potato 5. spinach

7. Our Food

B. Fill in the blanks : (TB)

1. cereals : pulses 2. cloves : turmeric
3. husk : grains 4. washed, cleaned, cooked

C. Multiple choice questions : (TB)

1. d 2. a 3. c 4. a

D. Tick (✓) the True and cross (X) the False statement : (TB)

1. ✓ 2. X 3. ✓ 4. X

E. Match the following : (AD)

1. D 2. A 3. B 4. E 5. C

F. Match the products which are made by plants animals : (AD)

- plants --- wheat, tea, fruits.
animals --- milk, eggs, meat.

G. Identify the following activities in the farming pictures and write their names : (AD)

- | | | |
|--------------|--------------|---------------|
| 1. Ploughing | 2. Sowing | 3. Irrigation |
| 4. Harvsting | 5. Threshing | 6. Winnowing |

8. Eating together

B. Fill in the blanks : (TB)

- | | | |
|--------------|---------------------|----------------|
| 1. Closeness | 2. cooking, serving | 3. attendance. |
|--------------|---------------------|----------------|

C. Multiple choice questions : (TB)

- | | | |
|------|------|------|
| 1. a | 2. c | 3. c |
|------|------|------|

D. Tick (✓) the true and cross (X) false statements : (TB)

- | | | |
|------|------|------|
| 1. ✓ | 2. ✓ | 3. X |
|------|------|------|

E. Match the food items to the place where they belong : (TB)

- | | | | |
|-------------|---|---|----------|
| 1. Pizza | ● | ● | Thailand |
| 2. Chowmein | ● | ● | China |
| 3. Macaroni | ● | ● | Italy |
| 4. Burger | ● | ● | America |

F. Observe the following pictures and identify the events : (AD)

- | | |
|--|-------------------------------|
| 1. wedding | 2. eating at a bosting school |
| 3. religious festival | 4. eating at school |
| 5. guests eat together on the occassion of wedding | |

G. Match the columns : (AD)

- | | | | | |
|------|------|------|------|------|
| 1. C | 2. A | 3. E | 4. B | 5. D |
|------|------|------|------|------|

9. Types of things

B. Fill in the blanks : (AD)

- | | | |
|--------|-------------------|---------|
| 1. Hut | 2. Bangalow, flat | 3. slum |
|--------|-------------------|---------|

C. Multiple choice questions : (TB)

- | | | |
|------|------|------|
| 1. a | 2. a | 3. a |
|------|------|------|

D. Match the columns : (TB)

- | | | | |
|------|------|------|------|
| 1. C | 2. A | 3. B | 4. D |
|------|------|------|------|

E. Take a chart and make a drawing of your house you live in and colour it. (TB)

Student activity

F. Make a house by joining correctly : (TB)

Student activity

G. Make a model of a house of prehistoric times , olden days : (TB)
Student activity

H. Tick (✓) the true and cross (X) for the false statements : (TB)

1. ✗ 2. ✓ 3. ✓ 4. ✓ 5. ✓ 6. ✓

10. Homes of Animals

B. Fill in the blanks : (TB)

1. trees, nest 2. herd
3. domestic 4. coop

C. Multiple choice questions : (TB)

1. a 2.a

D. Match the columns : (TB)

1. b 2. a 3. c

E. Make chart on houses of animals. And hang it in the class : (TB)

Student activity.

F. Tick (✓) the true and the cross (X)the false statements : (AD)

1. ✓ 2. ✓ 3. ✓ 4. ✗ 5. ✓

G. Identify the pictures of the animal houses and write their names:(AD)

1. den 2. herd 3. burrow
4. holes 5. hills 6. behave.

11. Sources of water

B. Fill in the blanks : (TB)

1. blue 2. rain 3. reservoir

C. Multiple choice questions : (TB)

1. a 2. a

D. Match the columns : (TB)

1. b 2. c 3. a

E. Identify the following pictures and write their names : (AD)

1. rain 2. river 3. sea
4. pond 5. lake 6. ocean

F. Tick (✓) the true and cross (X) the false statement : (AD)

1. ✗ 2. ✓ 3. ✓ 4. ✓ 5. ✗

12. Keep water safe

B. Fill in the blanks : (TB)

1. portable 2. precious
3. bucket 4. Ro, aquaguards

C. Multiple choice questions : (TB)

1. a 2. d 3. c

D. Tick (✓) the true and cross (X) the false statements : (TB)

1. ✓ 2. X 3. ✓

E. Match the columns : (AD)

1. D 2. A 3. B 4. E 5. C

F. Identify the following pictures and write their names : (AD)

1. boiling 2. filtering 3. water treatment plant.

13. Animals for Transport

B. Fill in the blanks : (TB)

1. camels 2. tiger 3. elephants 4. bullock carts

C. Multiple choice questions : (TB)

1. a 2. d 3. d 4. b

D. Tick (✓) the true and cross (X) the false statement : (TB)

1. ✓ 2. X 3. ✓

E. Identify the following pictures and write their names : (AD)

1. sledge 2. bullock cart 3. carriage 4. chariot

F. Match the columns : (AD)

1. C 2. D 3. A 4. E 5. B

Environmental Studies - 5

1. The changing families

B. Fill in the blanks : (TB)

1. Migration 2. Displace 3. Job 4. Education, career

C. Multiple choice questions : (TB)

1. c 2. d 3. a 4. d

D. Tick (✓) the True and cross (✗) the false statement : (TB)

1. ✓ 2. ✗ 3. ✗ 4. ✓

E. Find the name of a migratory bird that migrate to the Antarctic region to escape the cold winters of the Arctic region. You just have to write the initial letters of these pictures to set the name of the bird : (TB)

1. Ass 2. Rat 3. Cat 4. Tool 5. Ink
6. Cow 7. Tiger 8. Urn 9. Ribbon 10. Nest

Ans :-- Arctic Turn

F. Collect information in about some well know Indian women who have excelled in their fields and write it in your note nbook : (TB)



- * She served as Prime Minister of India for an aggregate period of 15 years.
- * She is the world largest serving women prime minster.



- * She ia a social worker. She leads the agitation of Narmada Bacho Andolon.



* She became the first women teacher in India.



* She became the first female President of Indian National Congress .

D. Match the following : (TB)

1. C 2. A 3. D 4. B

2. People with special needs

B. Fill in the boxes with the words given in the box :(TB)

1. sign language 2. Braille 3. help, overcome

C. Multiple choice questions : (TB)

1. a 2. a & d 3. a 4.a

D. Tick (✓) the True and cross (X) the false statement : (TB)

1. ✓ 2. ✓ 3. ✓ 4. X 5. X

E. Match the following :

1. C 2. D 3. A 4. C 5. B

F. Here are some aids that help physically challenged people to lead a normal life - name them : (TB)

Student Activity.

3. Games We Play

B. Fill in the blanks : (TB)

1. excercise 2. golf,chess
3. hockey, football 4. team

C. Multiple choice questions : (TB)

- 1.d 2.a 3. a 4.b

D. Match the columns : (TB)

1. C 2. D 3. B 4. C 5. A

E. Identify the following pictures and write their names : (TB)

1. Sachin Tendulkar (India)
2. Usain St. Leo Bolt (Jamaica)
3. Cristiano Ronaldo (Portuguese)
4. Le Born Raynore James (Miami)

F. Fill the following table : (AD)

- | | | |
|------------------|--------------|--------------|
| 1. Hockey | 2. Base ball | 3. Foot ball |
| 4. Sumowrestling | 5. Rugby | 6. Rugby |

G. Tick (✓) for true and cross(x)for false statements : (TB)

1. ✗ 2. ✓ 3. ✓ 4. ✗ 5. ✓

H. Name the local merial arts : (AD)

1. judo and karate 2. thangs - ta 3. thoda 4. kaleri pyattu

4. Dignity of labour

B. Fill in the blanks : (TB)

1. living 2. workers 3. untouchability 4. Harizans

C. Multiple choice questions : (TB)

1. c 2. a 3. c

D. Tick (✓) for true and cross (X) for false statements : (TB)

1. ✗ 2. ✗ 3. ✓ 4. ✓

E. List any five essential services that you need everyday. Find out and write the names of the people who provide these services to you.(TB)

Essential services

1. collects garbage from each house.
2. delivers news paper every morning.
3. take care of the plants in our garden.
4. delivers milk
5. cleaning job of our house

Names

- garbeage collector
News paper vendor
Gardener
Milkman
Maid servant

D. Match the following : (AD)

1. C 2. E 3. A 4. B 5. D

5. The World of Plants

B. Fill in the blanks : (TB)

1. seed coat 2. flowers 3. seed dispersal
4. germination 5. sunlight

C. Multiple choice questions : (TB)

1. a 2. a 3. a 4. d

D. Match the following : (TB)

1. D 2. E 3. A 4. B

E. Tick (/) for true and cross (x) for false statements : (TB)

1. ✓ 2. ✓ 3. ✗ 4. ✓ 5. ✗

F. Fill in the following table : (TB)

1. Potato 2. Tomato 3. Coffee
4. Apple 5. Onion

6. The world of Animals

B. Fill in the blanks : (TB)

1. nocturnal 2. dogs 3. open
4. wool 5. wild life

C. Multiple choice questions : (TB)

1. a 2. a 3. d

D. Match the columns : (TB)

1. D 2. C 3. A 4. E 5. B

E. Tick (✓) for true and cross (✗) for false statements : (AD)

1. ✗ 2. ✗ 3. ✓ 4. ✓ 5. ✓

F. Identify the following pictures and write their names : (AD)

1. Tiger 2. Elephant 3. Bear
4. Muskdeer 5. Rhino

E. Find out the steps involved in the process of growing crops and complete this cross word : (TB)

Horizontal

Harvesting

ploughing

watering

threshing

Vertical

sowing

irrigating

winnowing

F. Fill the following table : (AD)

- | | | |
|-----------------------|------------------------|--------------|
| 1. dal bhati choorma | 2. makk ki-roti | 3. rasagulla |
| 4. idle, dosa, sambar | 5. rogan josh and rice | |

9. Plants and animals food.

B. Fill in the blanks : (TB)

- | | | |
|------------------|--------------|-----------|
| 1. pitcher plant | 2. scavenger | 3. energy |
| 4. food web | 5. sun light | |

C. Multiple choice questions : (TB)

- | | | |
|------|------|------|
| 1. b | 2. a | 3. d |
|------|------|------|

D. Match the following : (TB)

- | | | | | |
|------|------|------|------|------|
| 1. E | 2. D | 3. A | 4. C | 5. B |
|------|------|------|------|------|

E. Identify the following pictures and write their names : (TB)

- | | |
|------------------|-------------------|
| 1. mushroom | 2. venus fly trap |
| 3. pitcher plant | 4. sundew |

F. Tick (✓) the true and the cross (X) the false statement : (TB)

- | | | | | |
|------|------|------|------|------|
| 1. ✓ | 2. X | 3. X | 4. ✓ | 5. ✓ |
|------|------|------|------|------|

G. Write 'H' for herbivores, 'O' for omnivores and 'S' for scavengers :(TB)

- | | | | |
|------|------|------|------|
| 1. H | 2. S | 3. C | 4. H |
|------|------|------|------|

10. Shelter for All.

B. Fill in the blanks : (TB)

- | | | |
|-----------------------------|------------------|------------|
| 1. weak, strong wind, rains | 2. wood, sloping | 3. beehive |
| 4. floating | 5. tents | |

C. Multiple choice questions : (TB)

1. d 2. d 3. c 4. c 5. b

D. Tick (✓) the true and (X) the false statements : (TB)

1. ✓ 2. X 3. ✓ 4. X 5. X

E. Match the columns : (TB)

1. D 2. B 3. A 4. C

F. Find out the names of houses in this word search and match them with their pictures : (TB)

Student Activity

11. Times of Emergency

B. Fill in the blanks : (TB)

1. fracture 2. landslides 3. cyclone
4. flood 5. earthquakes

C. Multiple choice questions : (TB)

1. a 2. a 3. d 4. d 5. b

D. Match the columns : (TB)

1. C 2. E 3. A 4. B 5. D

E. Tick (✓) the true and cross (X) the false statement : (TB)

1. ✓ 2. ✓ 3. X 4. ✓ 5. X

F. Identify the following pictures and write their names : (AD)

1. earthquake 2. tsunami
3. volcanic eruption 4. cyclone

12. Keep water save.

B. Fillin the blanks : (TB)

1. baoli 2. sprinkler
3. sugarcane, rubber 4. water wheel

C. Multiple choice questions : (TB)

1. a 2. a 3. b 4. b 5. a

D. Match the columns : (TB)

1. C 2. B 3. A

E. Find out the least five sources of water in this picture and colour them : (TB) student activity.

F. Tick (✓) the true and cross (X) the false statement : (AD)

1. ✓ 2. X 3. X 4. X 5. ✓

13. Aquatic Life

B. Fill in the blanks : (TB)

- floating
- aquatic
- soluble
- density
- malaria

C. Multiple choice questions : (TB)

1. b 2. b 3. c 4. a

D. Tick (✓) the true and cross (X) the false statement : (TB)

1. X 2. ✓ 3. ✓ 4. X 5. ✓

E. Choose the things and unite them in separate columns : (TB)

rubber band, coin, cork, sponge, hair pin, safety pin, leaf, egg, paper, thread, stone.

| Objects | sink in water | float in water |
|-------------|---------------|----------------|
| rubber band | ✓ | ✓ |
| coin | | |
| cork | | |
| sponge | ✓ | |
| hair pin | ✓ | ✓ |
| safety pin | | |
| leaf | ✓ | |
| egg | ✓ | ✓ |
| paper | | |
| thread | | |
| stone | ✓ | |

F. Match the columns : (TB)

1.E 2. A 3. D 4. B 5.C

14. Fuel for Vehicles

B. Fill in the blanks : (TB)

1. fuel 2. alternate 3. coal
4. natural gas 5. hydrogen

C. Multiple choice questions : (TB)

1.d 2.a 3.d 4.d

D. Tick (✓) the 'true' and cross (X) the false statement : (TB)

1. ✓ 2. ✓ 3. X 4. ✓ 5. ✓

E. Find out the name of coal mining areas and oil producing centres in Indian this word grid : (TB)

Student activity.

F. Match the columns : (TB)

1. C 2. A 3. E 4. B 5. D

15. Adventure and Exploration

B. Fill in the blanks : (TB)

1. Satellite 2. Tenzing Norway, Sir Edmand Hillary
3. Yuri Gagarian 4. Rakesh Sharma.

C. Multiple choice questions : (TB)

1. b 2. c 3. a 4. a

D. Tick (✓) the true and cross (X) the false statement : (TB)

1. ✓ 2. ✓ 3. X 4. X 5. ✓

E. Identify these astronauts and write their names : (TB)

1. Kalpana Chawla 2. Neil Armstrong
3. Rakesh Sharma 4. Valentina Tereshkova

F. Match the columns : (AD)

1. E 2. A 3. D 4. B 5. C

16. Historical Monuments.

B. Fill in the blanks : (TB)

1. culture and heritage 2. Taj Mahal
3. Red Fort 4. Sun temple 5. Conserve

C. Multiple choice questions : (TB)

1. a 2. a 3. a 4. a

D. Match the following : (TB)

- 1.C 2.D 3.E 4.B 5.A

E. Find out the names of places where following monuments are located :(TB)

Student activity.

F. Tick (✓) the true and cross (X) the false statements : (TB)

1. ✓ 2. X 3. X 4. ✓ 5. ✓

